

Number Sense Compares Sets



Objective:

Student compares sets of objects using the terms *more*, *same*, and *less*.

Materials:

Blue Mat, p. 11


Green Mat, p. 13

Apple Cards, p. 15

Class Checklist, p. 17

Activity Sheet, p. 18

Blank sheet of paper



Student Task

(Note: You may adjust this task to the abilities of your students. Use one or both mats. The blue mat is less challenging than the green mat.)

Say:

Today you will compare apples and oranges.

Use the same color mat and cards. Place the mat in front of the student. Cover all the rows except for row 1 with a blank sheet of paper. Move card 1 along each section of row 1 as you say:

Are there more apples than oranges, the same number, or less?





Student responds. Place card 1 on row 1, indicating the student's response. Move the paper down the mat to reveal row 2. Move card 2 along each section of row 2 as you say:

Are there more apples than oranges, the same number, or less?

Student responds. Place card 2 on row 2, indicating the student's response.

Repeat the procedure and the script modeled above for rows 3 and 4. Use the mat as a reference to record the student's responses on the class checklist.


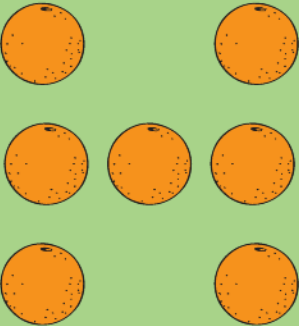


Apples and Oranges





More	Same	Less
1		
2		
3		
4		





Compares Sets
Number Sense

EMC 3026 • © Evan-Moor Corp.

Apples and Oranges

More	Same	Less
1		
2		
3		
4		

1	
2	
3	
4	

1	
2	
3	
4	

Compares Sets
Number Sense

EMC 3026 • © Evan-Moor Corp.

Compares Sets
Number Sense

EMC 3026 • © Evan-Moor Corp.

Compares Sets
Number Sense

EMC 3026 • © Evan-Moor Corp.

Compares Sets
Number Sense

EMC 3026 • © Evan-Moor Corp.

Compares Sets
Number Sense

EMC 3026 • © Evan-Moor Corp.

Compares Sets
Number Sense

EMC 3026 • © Evan-Moor Corp.

Compares Sets
Number Sense

EMC 3026 • © Evan-Moor Corp.

Compares Sets
Number Sense

EMC 3026 • © Evan-Moor Corp.


Compares Sets



Class Checklist		Key: + correct response - incorrect response ● self-corrected									
Name	Date	Blue Mat				Green Mat				Notes	
		Less	Less	Same	More	Less	Same	More	Less		

Note: Student compares sets.

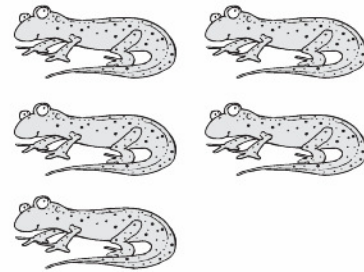

Name _____




Less and More

Circle the correct answer.



1 Which has more?



2 Which has less?



3 Which has more?




Answer Key


Page 18


Name _____

Less and More

Circle the correct answer.

1 Which has more?


2 Which has less?


3 Which has more?


18 **Number Sense**
Compares Sets

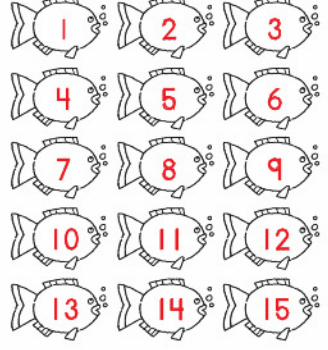
EMC 3026 • Math Assessment Tasks • © Evan-Moor Corp.

Page 22

Name _____

A School of Fish

Trace the numbers. Count out loud.



22 **Number Sense**
Counts to 15

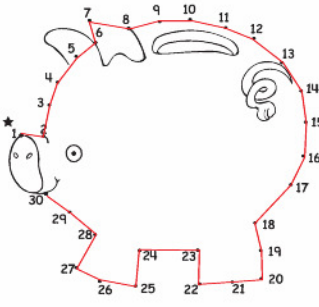
EMC 3026 • Math Assessment Tasks • © Evan-Moor Corp.

Page 26

Name _____

Make a Bank

Connect the dots. Count out loud. Start with 1.



26 **Number Sense**
Counts to 30


EMC 3026 • Math Assessment Tasks • © Evan-Moor Corp.


Page 34


Name _____

Bugs, Bugs, Bugs

Cut out the bugs. Put the bugs on the picture. Count out loud.

1 **2 bugs**


2 **3 bugs**


3 **5 bugs**


34 **Number Sense**
Counts Objects


EMC 3026 • Math Assessment Tasks • © Evan-Moor Corp.


Page 52

Name _____

Wiggle Worms

Cut out the numbers. Glue them in order.

1


2


52 **Number Sense**
Orders Numbers 1 to 15

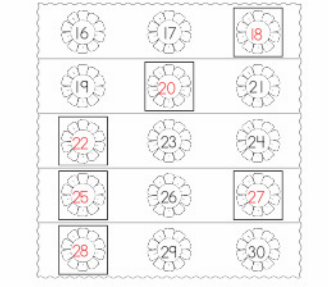
EMC 3026 • Math Assessment Tasks • © Evan-Moor Corp.

Page 58

Name _____

Make a Garden

Cut out the numbers. Glue them where they belong.



58 **Number Sense**
Orders Numbers 10 to 30

EMC 3026 • Math Assessment Tasks • © Evan-Moor Corp.